

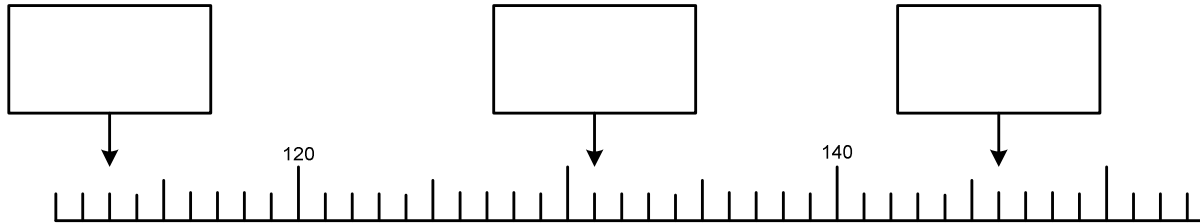
Homework

Name: _____

Remember that if you get stuck, you can go onto the relevant exercises on www.achildsguideto.com
→ Maths.

1.

Write the numbers, as decimals, indicated by the arrows.



2.

Calculate $16 + 23 + 45$

Show your working and put your answer in the box on the right.

3.

Write two hundred and six in figures

4.

Draw a line pairing up the numbers that add up to make 100.

23	87
51	59
64	36
37	63
	49
	77

5.

Round the following to the nearest...				
Number	Nearest whole	Nearest 10	Nearest 100	Nearest 1000
5731				
2365				

6.


Choose which box to put each digit in to make the closest number to **23175** that you can make. You must use all the digits. You can only use each digit the number of times it appears on the cards at the bottom.

<input type="text"/>	<input type="text"/>	<input type="text"/>	<input type="text"/>	<input type="text"/>
----------------------	----------------------	----------------------	----------------------	----------------------

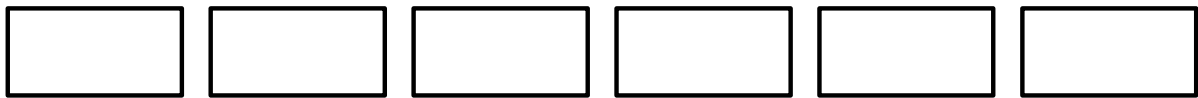
1	2	3	4	5
---	---	---	---	---

7.

Partition 62.1



8.



Smallest

Largest

1.6

16

1.06

61

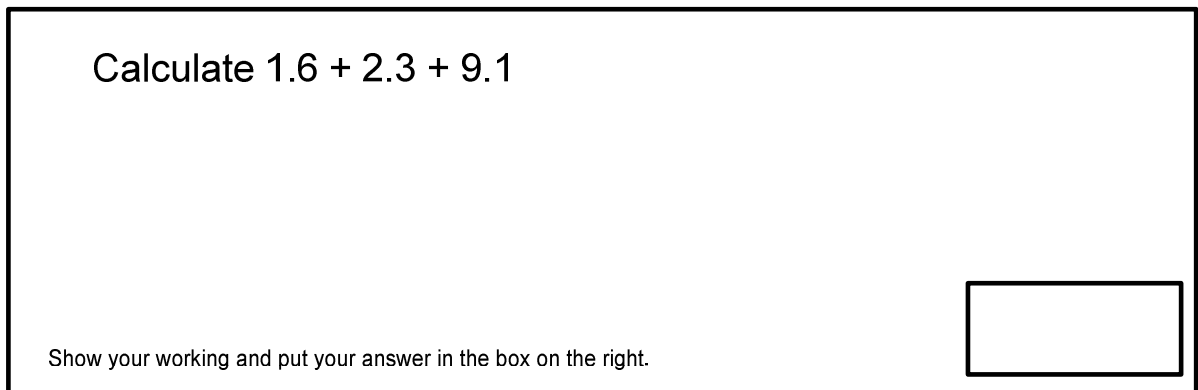
10.6

106

9.

Calculate $1.6 + 2.3 + 9.1$

Show your working and put your answer in the box on the right.



10.

Write the numbers, as decimals, indicated by the arrows.

